

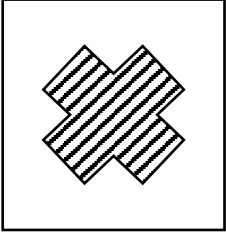






هوئش ریاضی



هوش ریاضی

با توجه به تصاویر ارائه شده کد مربوط به تصویری که با علامت سوال مشخص شده کدام است؟

			
P S	W M	P R	D M



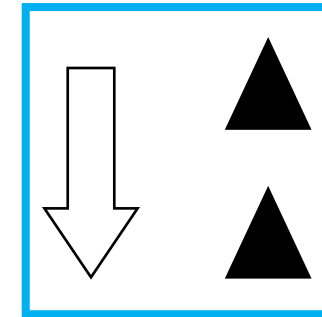
- W M ۱
- W S ۲
- P S ۳
- D R ۴



هوش ریاضی

با توجه به تصاویر ارائه شده کد مربوط به تصویر که با علامت سوال مشخص شده کدام است؟

Z S	A M	T R	Z M




- TM ۱
- TS ۲
- AS ۳
- AR ۴



هوش ریاضی

با توجه به تصاویر ارائه شده کد مربوط به تصویری که با علامت سوال مشخص شده کدام است؟


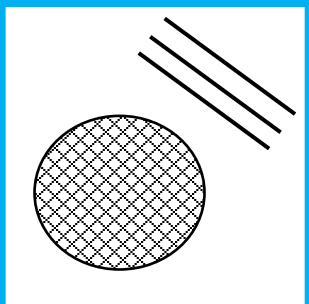


V E	V K	T F	O K




- VF ۱
- TE ۲
- VF ۳
- VE ۴

هوش ریاضی

با توجه به تصاویر ارائه شده کد مربوط به تصویر که با علامت سوال مشخص شده کدام است؟

			
B C	F L	B L	K V



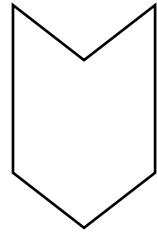
- KC ۱
- KV ۲
- BL ۳
- KL ۴





هوش ریاضی


با توجه به تصاویر ارائه شده کد مربوط به تصویری که با علامت سوال مشخص شده کدام است؟



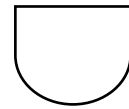
XJ



XK



YJ



XK

۱

XJ

۲

YK

۳

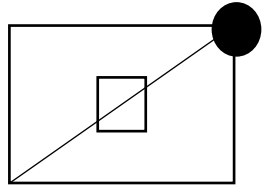
YX

۴

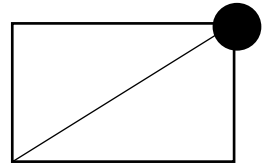


هوش ریاضی

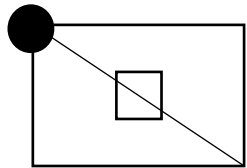
با توجه به تصاویر ارائه شده کد مربوط به تصویری که با علامت سوال مشخص شده کدام است؟



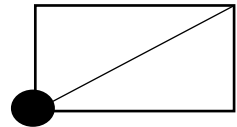
FJ



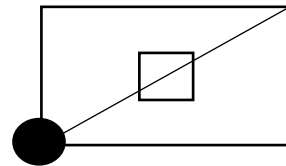
GJ



FK



GL



FL ۱


GL ۲

FK ۳

GJ ۴



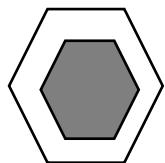
هوش ریاضی



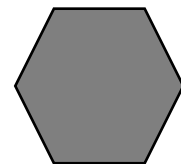
JLF



JMH



KMF



KLF

۱

JLM

۲

JMH

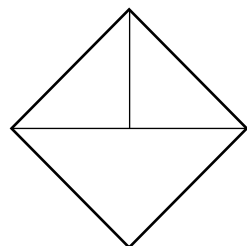
۳

KMH

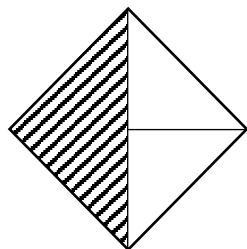
۴



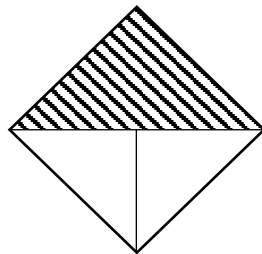
حوش ریاضی



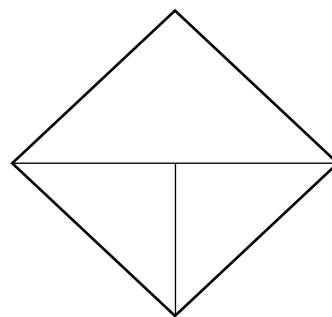
GK



HL



HM



GM

۱

GL

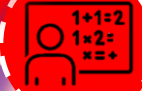
۲

HK

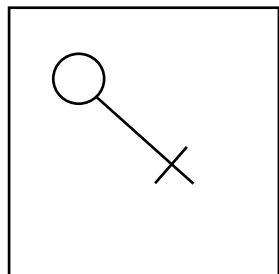
۳

GH

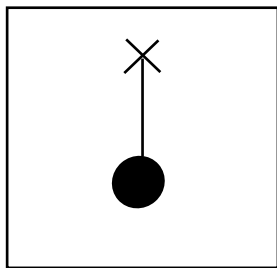
۴



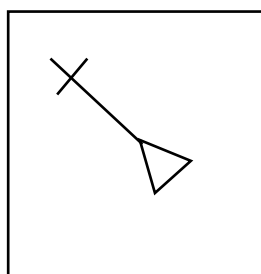
هوش ریاضی



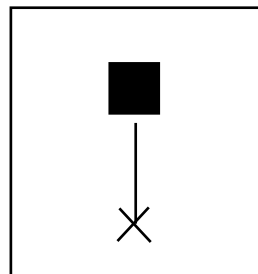
CD



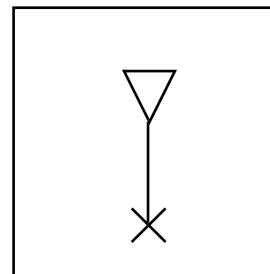
CV



TD



NV

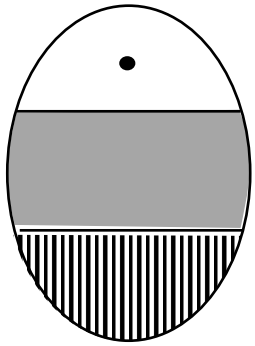


?

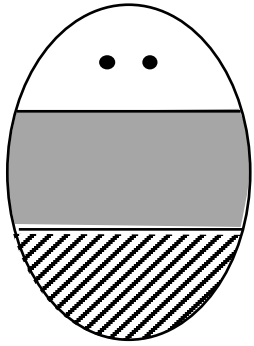
- TV ۱
- NV ۲
- SD ۳
- TH ۴



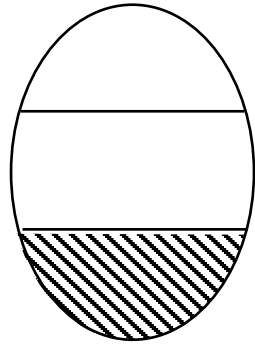
هوش ریاضی




OK




MK



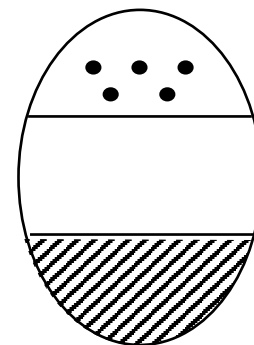
NL



OJ



NJ



?

NK



OJ



ML

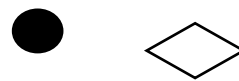
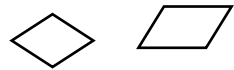
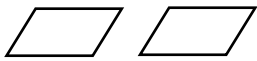
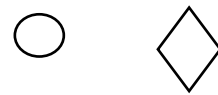



OL





هوش ریاضی



ED

FA

EB

FD

GC

?

EA



FC



GB

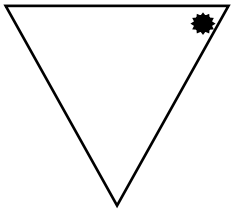


GD

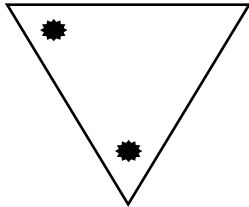




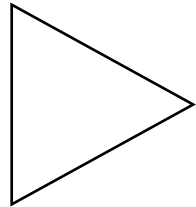
هوش ریاضی



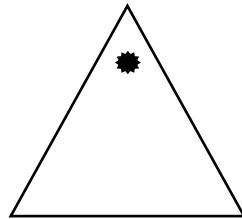
VT



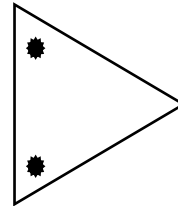
UT



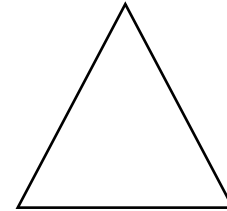
WS



VR



US




?

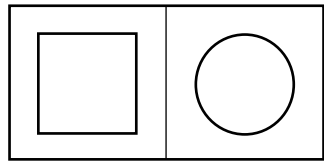
- VS
- WT
- WR
- UR



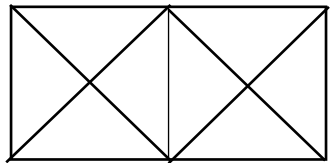
هوش ریاضی



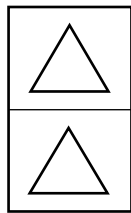
MW



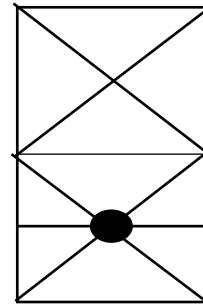
MW



LW



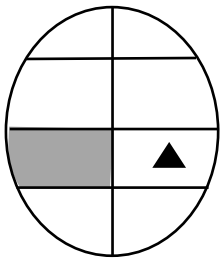
LX



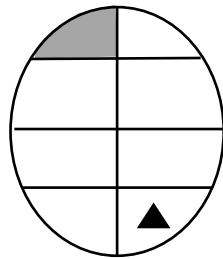
- MX ۱
- LW ۲
- MW ۳
- LX ۴



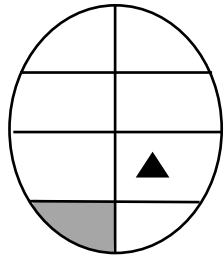
هوش ریاضی



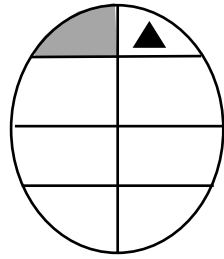
JR



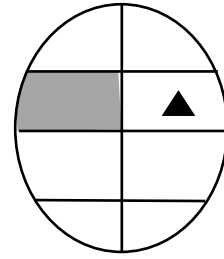
KT



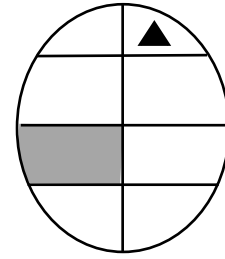
JQ



HT



IS



?

IT

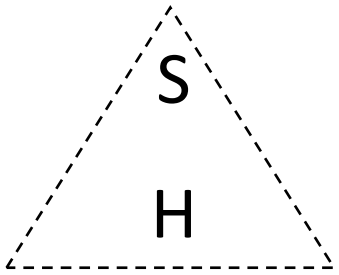
KS

IR

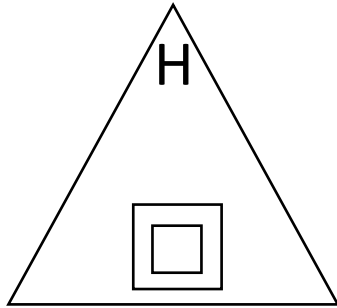
HR



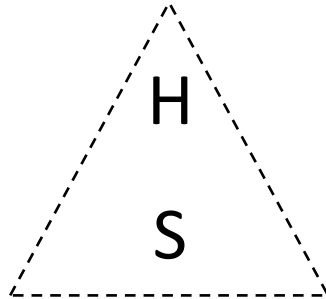
حوش ریاضی



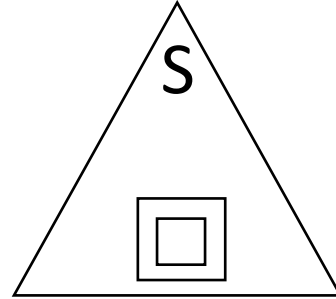
?



LND



KNE



LMD

KND



KMP



LDN

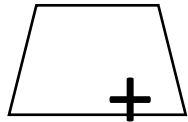
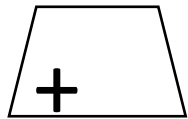


KNM

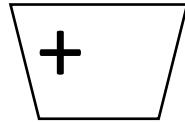
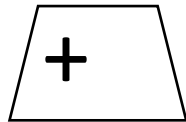




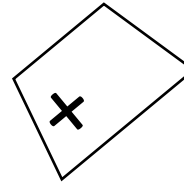
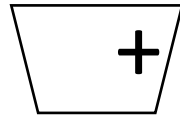
هوش ریاضی




ZYZ



ZXZ



ZWZ



?

XWZ ۱

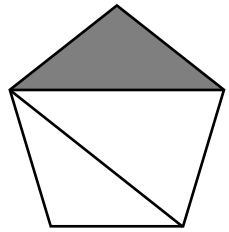
ZWX ۲

TWV ۳

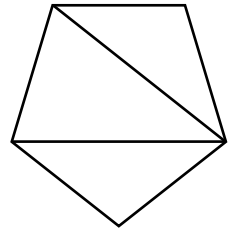
RTR ۴



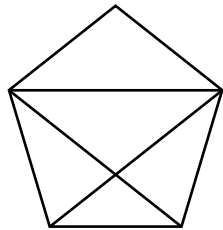
حوش ریاضی



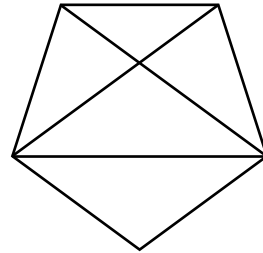
XFJ



YGJ



XGK



KLF

۱

XGK

۲

JMH

۳

XGJ

۴